



Tanlov 45 daqiqa davom etadi. Har bir savolga faqatgina bitta to'g'ri javob mos keladi (A – E). Berilgan topshiriqlarning to'liq yechimini keltirish talab etilmaydi. Tanlovda maktab dasturidan tashqari savollar ham uchrashi mumkin.

2024 yil, 26-mart

1-sinf

3 balli masalalar

1. Qaysi davlatning bayrog'ida oq rang o'rtada emas?



(A) Vengriya



(B) Bolgariya



(C) Fransiya

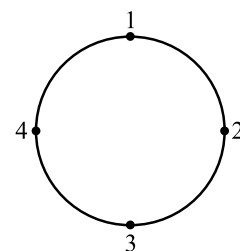


(D) Italiya

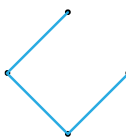


(E) Irlandiya

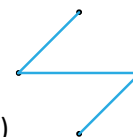
2. Aylanada 4 ta nuqta bor.



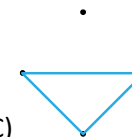
Agar Odilbek ularni $1 \rightarrow 3 \rightarrow 4 \rightarrow 2$ tartibda tutashtirsa, qanday shakl hosil bo'ladi?



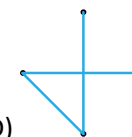
(A)



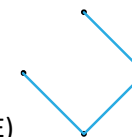
(B)



(C)




(D)




(E)

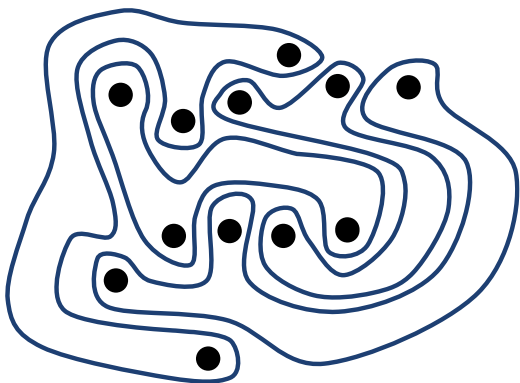
3. Alina 8 ta turli xil odamchanning rasmini chizdi. Faqat bitta odamchadan tashqari qolgan hammasi ikki martadan chizilgan.



Alina qaysi odamchanning rasmini faqat bir marta chizgan?



4. Rasmda ichida qora nuqtalari bor bo'lgan to'rtta figura tasvirlangan.



Shu figuralarning nechtasida roppa-rosa uchta nuqta bor?

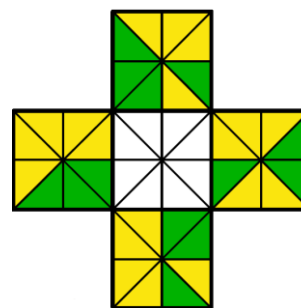
- (A) 0 (B) 1 (C) 2 (D) 3 (E) 4

14. Rasmdagi yashil rangli shakllarning nechtasi to'g'ri burchakka ega emas?

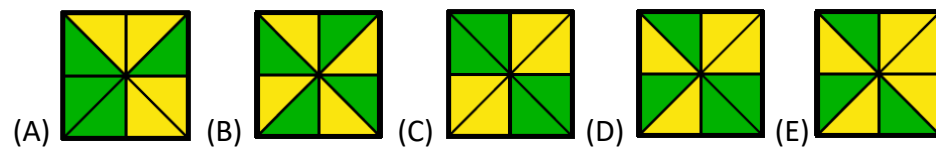


- (A) 1 (B) 2 (C) 3 (D) 4 (E) 5

15. Oq kvadrat ichidagi uchburchaklarni shunday bo'yash kerakki, natijada ularning har biri qo'shni kvadratda joylashgan qo'shni uchburchaklar bilan bir xil rangda bo'lishi kerak.




To'g'ri javobni tanlang.



12. Anvarda uchta quti bor. Ularning biriga "kvadratlar", ikkinchisiga "doiralar", uchinchisiga esa "uchburchaklar" deb yozilgan.

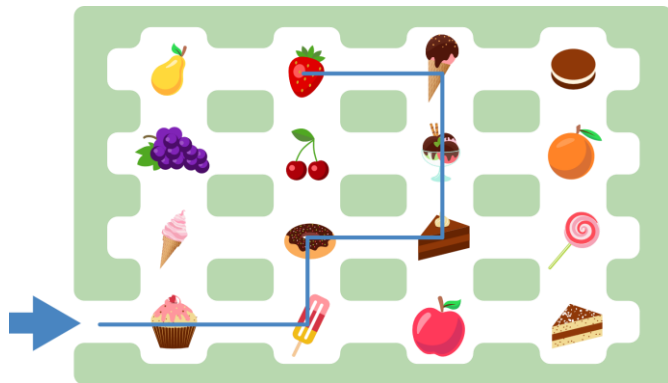
Stolning ustida quyidagi shakllar mavjud:



Agar Anvar ushbu shakllarni tegishli qutilarga solib chiqsa, stolning ustida nechta shakl qoladi?

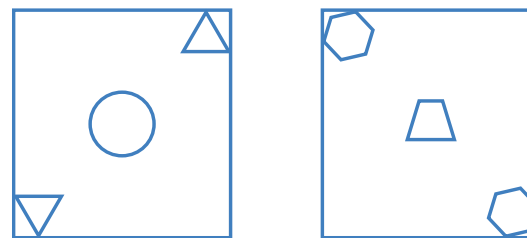
- (A) 1 (B) 2 (C) 3 (D) 4 (E) 5

13. Nigora va Kamola labirintga kirishdi. Kirish ko'k strelka bilan belgilangan. Agar Nigora $\rightarrow 2 \uparrow 1 \rightarrow 1 \uparrow 2 \leftarrow 1$ yo'nalish bo'ylab yurib qulupnay oldiga kelsa, Kamola $\rightarrow 1 \uparrow 1 \rightarrow 3 \uparrow 2 \leftarrow 2 \downarrow 1$ yo'nalish bo'ylab yurib, nimaning oldiga borib qoladi?

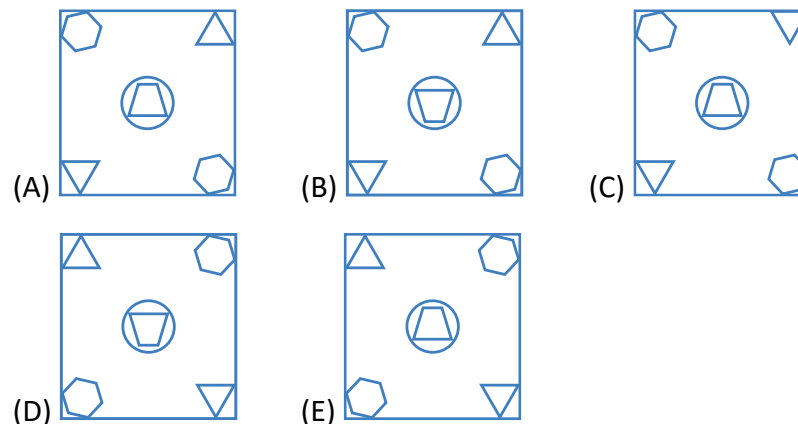


- (A) (B) (C) (D) (E)

5. Ikki shisha plastinalar ustiga figuralar tasviri tushirilgan.

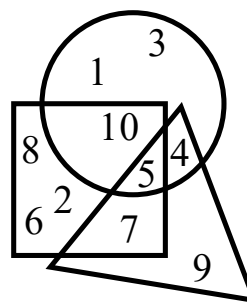


Agar Anora shu ikki plastinadan birini aylantirmagan holda ikkinchisining ustiga qo'ysa, u nimanı ko'rishı mumkin?



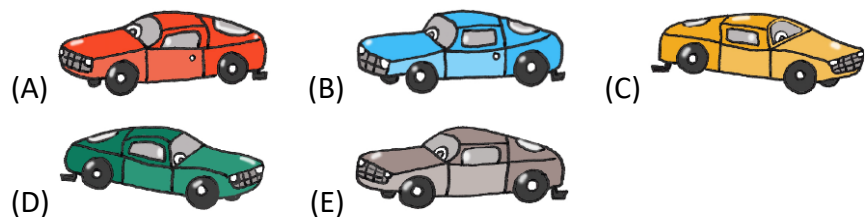
4 balli masalalar

6. Qaysi son uchburchak, kvadrat va aylananing ichida joylashgan?



- (A) 1 (B) 4 (C) 5 (D) 9 (E) 12

7. Qaysi mashinaning ruli chap tomonda?



8. Zarina 5 xil 🌻 👻 🐱 🌙 🔥 stikerlarni ketma-ket bir xil tartibda yopishtirdi:



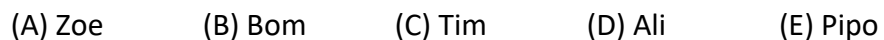
Tartibdagi o'ninchi stiker qaysi?



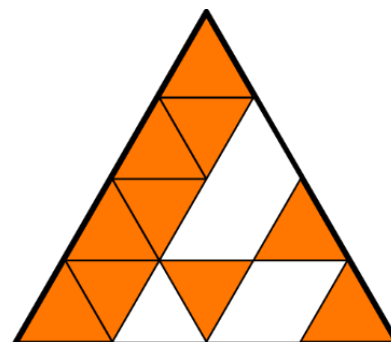
9. Komil turli mamlakatlarda yashovchi yettita do'stidan xabar oldi. Har bir do'sti unga o'zining rasmini berdi. Komil do'stlaridan olgan rasmlarini o'zida mavjud bo'lgan rasmlarning ustiga qo'ydi.



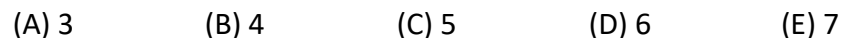
U birinchi bo'lib qaysi do'stidan xabar olgan?



10. Bobur bir xil o'lchamdagi kichik uchburchaklar yordamida katta uchburchak yig'moqchi.



Buning uchun unga yana nechta kichik uchburchaklar kerak bo'ladi?



5 balli masalalar

11. Qalamlarning qaysi biri eng uzun?

